

LBRIS

We know
books



SCĂDEREA











clasa a II-a

Rezolvă:

Scrive câte puncte ai adunat:



Ai peste 80?
Lipește steluța pe diplomă.

	20	$\xrightarrow{-1}$	<input type="text"/>	$\xrightarrow{-2}$	<input type="text"/>	$\xrightarrow{-3}$	<input type="text"/>	$\xrightarrow{-4}$	<input type="text"/>
	25	$\xrightarrow{-1}$	<input type="text"/>	$\xrightarrow{-2}$	<input type="text"/>	$\xrightarrow{-3}$	<input type="text"/>	$\xrightarrow{-4}$	<input type="text"/>
	30	$\xrightarrow{-1}$	<input type="text"/>	$\xrightarrow{-2}$	<input type="text"/>	$\xrightarrow{-3}$	<input type="text"/>	$\xrightarrow{-4}$	<input type="text"/>
	35	$\xrightarrow{-1}$	<input type="text"/>	$\xrightarrow{-2}$	<input type="text"/>	$\xrightarrow{-3}$	<input type="text"/>	$\xrightarrow{-4}$	<input type="text"/>
	40	$\xrightarrow{-1}$	<input type="text"/>	$\xrightarrow{-2}$	<input type="text"/>	$\xrightarrow{-3}$	<input type="text"/>	$\xrightarrow{-4}$	<input type="text"/>
	45	$\xrightarrow{-1}$	<input type="text"/>	$\xrightarrow{-2}$	<input type="text"/>	$\xrightarrow{-3}$	<input type="text"/>	$\xrightarrow{-4}$	<input type="text"/>
	50	$\xrightarrow{-1}$	<input type="text"/>	$\xrightarrow{-2}$	<input type="text"/>	$\xrightarrow{-3}$	<input type="text"/>	$\xrightarrow{-4}$	<input type="text"/>
	23	$\xrightarrow{-1}$	<input type="text"/>	$\xrightarrow{-2}$	<input type="text"/>	$\xrightarrow{-3}$	<input type="text"/>	$\xrightarrow{-4}$	<input type="text"/>
	34	$\xrightarrow{-1}$	<input type="text"/>	$\xrightarrow{-2}$	<input type="text"/>	$\xrightarrow{-3}$	<input type="text"/>	$\xrightarrow{-4}$	<input type="text"/>
	42	$\xrightarrow{-1}$	<input type="text"/>	$\xrightarrow{-2}$	<input type="text"/>	$\xrightarrow{-3}$	<input type="text"/>	$\xrightarrow{-4}$	<input type="text"/>

Recapitulare











Scăderea numerelor de două cifre cu numere de o cifră


Rezolvă:

Scrive câte puncte ai adunat:



Ai peste 80?
Lipește steluța pe diplomă.

	52	$\xrightarrow{-6}$	<input type="text"/>	$\xrightarrow{-7}$	<input type="text"/>	$\xrightarrow{-8}$	<input type="text"/>	$\xrightarrow{-9}$	<input type="text"/>
	58	$\xrightarrow{-6}$	<input type="text"/>	$\xrightarrow{-7}$	<input type="text"/>	$\xrightarrow{-8}$	<input type="text"/>	$\xrightarrow{-9}$	<input type="text"/>
	60	$\xrightarrow{-6}$	<input type="text"/>	$\xrightarrow{-7}$	<input type="text"/>	$\xrightarrow{-8}$	<input type="text"/>	$\xrightarrow{-9}$	<input type="text"/>
	65	$\xrightarrow{-6}$	<input type="text"/>	$\xrightarrow{-7}$	<input type="text"/>	$\xrightarrow{-8}$	<input type="text"/>	$\xrightarrow{-9}$	<input type="text"/>
	63	$\xrightarrow{-6}$	<input type="text"/>	$\xrightarrow{-7}$	<input type="text"/>	$\xrightarrow{-8}$	<input type="text"/>	$\xrightarrow{-9}$	<input type="text"/>
	57	$\xrightarrow{-6}$	<input type="text"/>	$\xrightarrow{-7}$	<input type="text"/>	$\xrightarrow{-8}$	<input type="text"/>	$\xrightarrow{-9}$	<input type="text"/>
	61	$\xrightarrow{-6}$	<input type="text"/>	$\xrightarrow{-7}$	<input type="text"/>	$\xrightarrow{-8}$	<input type="text"/>	$\xrightarrow{-9}$	<input type="text"/>
	69	$\xrightarrow{-6}$	<input type="text"/>	$\xrightarrow{-7}$	<input type="text"/>	$\xrightarrow{-8}$	<input type="text"/>	$\xrightarrow{-9}$	<input type="text"/>
	50	$\xrightarrow{-6}$	<input type="text"/>	$\xrightarrow{-7}$	<input type="text"/>	$\xrightarrow{-8}$	<input type="text"/>	$\xrightarrow{-9}$	<input type="text"/>
	54	$\xrightarrow{-6}$	<input type="text"/>	$\xrightarrow{-7}$	<input type="text"/>	$\xrightarrow{-8}$	<input type="text"/>	$\xrightarrow{-9}$	<input type="text"/>

 = 10 puncte



Rezolvă:

Scrie câte puncte ai adunat:



1	11 -	2	13 -	3	18 -	4	26 -
	9		0		1		6
<hr/>							

5	38 -	6	47 -	7	93 -	8	23 -
	6		6		6		5
<hr/>							

9	28 -	10	41 -	11	42 -	12	45 -
	5		6		6		7
<hr/>							

13	64 -	14	66 -	15	80 -	16	91 -
	8		9		1		3
<hr/>							

17	92 -	18	54 -	19	59 -	20	11 -
	4		3		4		8
<hr/>							

Recapitulare

Scăderea numerelor de două cifre cu numere de o cifră



= 5 puncte

Rezolvă:

Scrie câte puncte ai adunat:



1 $47 -$
 5

2 $93 -$
 5

3 $23 -$
 4

4 $28 -$
 4

5 $41 -$
 5

6 $42 -$
 5

7 $45 -$
 6

8 $64 -$
 7

9 $66 -$
 8

10 $71 -$
 9

11 $92 -$
 2

12 $92 -$
 3

13 $54 -$
 2

14 $59 -$
 3

15 $11 -$
 7

16 $13 -$
 8

17 $17 -$
 8

18 $26 -$
 4

19 $38 -$
 4

20 $47 -$
 4



Rezolvă:

Scrive câte puncte ai adunat:



1

$$\begin{array}{r} 42 - \\ 4 \end{array}$$

2

$$\begin{array}{r} 45 - \\ 5 \end{array}$$

3

$$\begin{array}{r} 64 - \\ 6 \end{array}$$

4

$$\begin{array}{r} 66 - \\ 7 \end{array}$$

5

$$\begin{array}{r} 71 - \\ 8 \end{array}$$

6

$$\begin{array}{r} 91 - \\ 9 \end{array}$$

7

$$\begin{array}{r} 92 - \\ 2 \end{array}$$

8

$$\begin{array}{r} 54 - \\ 1 \end{array}$$

9

$$\begin{array}{r} 59 - \\ 1 \end{array}$$

10

$$\begin{array}{r} 59 - \\ 2 \end{array}$$

11

$$\begin{array}{r} 11 - \\ 6 \end{array}$$

12

$$\begin{array}{r} 13 - \\ 6 \end{array}$$

13

$$\begin{array}{r} 13 - \\ 7 \end{array}$$

14

$$\begin{array}{r} 17 - \\ 7 \end{array}$$

15

$$\begin{array}{r} 26 - \\ 3 \end{array}$$

16

$$\begin{array}{r} 38 - \\ 3 \end{array}$$

17

$$\begin{array}{r} 47 - \\ 3 \end{array}$$

18

$$\begin{array}{r} 93 - \\ 3 \end{array}$$

19

$$\begin{array}{r} 23 - \\ 2 \end{array}$$

20

$$\begin{array}{r} 28 - \\ 2 \end{array}$$

Rezolvă:



1

$$\begin{array}{r} 64 - \\ 5 \end{array}$$

2

$$\begin{array}{r} 66 - \\ 6 \end{array}$$

3

$$\begin{array}{r} 71 - \\ 7 \end{array}$$

4

$$\begin{array}{r} 80 - \\ 9 \end{array}$$

5

$$\begin{array}{r} 92 - \\ 1 \end{array}$$

6

$$\begin{array}{r} 92 - \\ 9 \end{array}$$

7

$$\begin{array}{r} 54 - \\ 9 \end{array}$$

8

$$\begin{array}{r} 11 - \\ 5 \end{array}$$

9

$$\begin{array}{r} 13 - \\ 5 \end{array}$$

10

$$\begin{array}{r} 17 - \\ 6 \end{array}$$

11

$$\begin{array}{r} 26 - \\ 2 \end{array}$$

12

$$\begin{array}{r} 38 - \\ 2 \end{array}$$

13

$$\begin{array}{r} 47 - \\ 2 \end{array}$$

14

$$\begin{array}{r} 93 - \\ 2 \end{array}$$

15

$$\begin{array}{r} 23 - \\ 1 \end{array}$$

16

$$\begin{array}{r} 28 - \\ 1 \end{array}$$

17

$$\begin{array}{r} 41 - \\ 1 \end{array}$$

18

$$\begin{array}{r} 42 - \\ 2 \end{array}$$

19

$$\begin{array}{r} 45 - \\ 3 \end{array}$$

20

$$\begin{array}{r} 64 - \\ 4 \end{array}$$